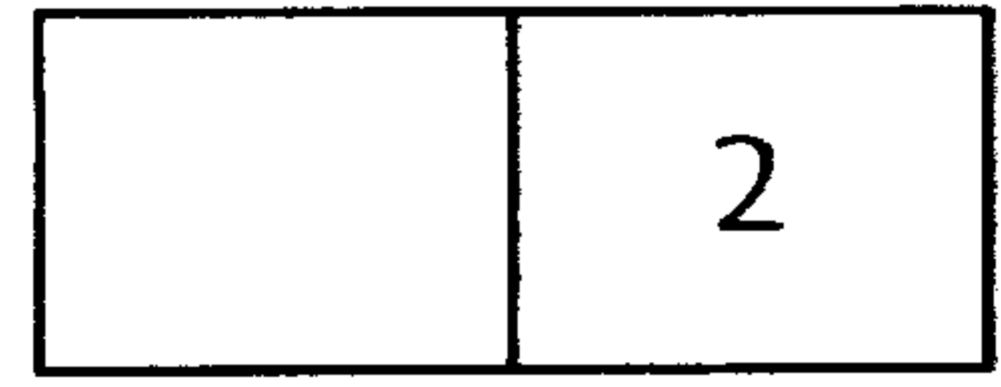
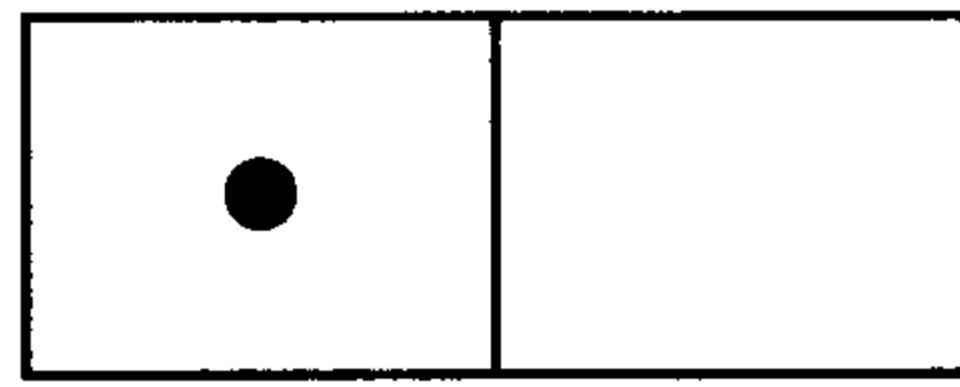
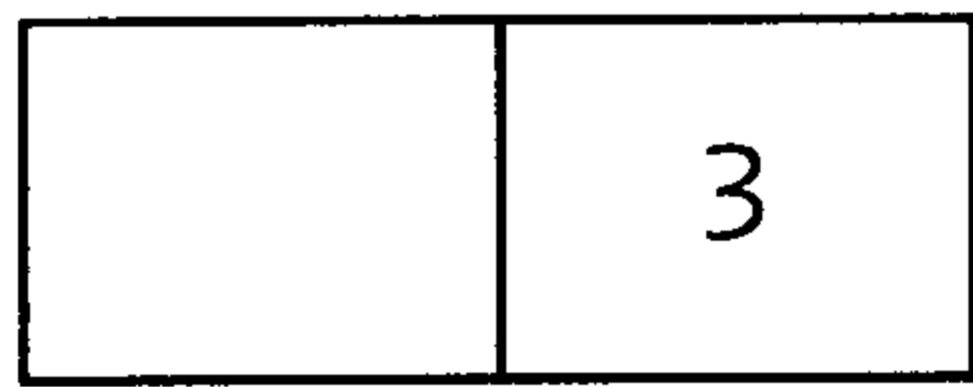
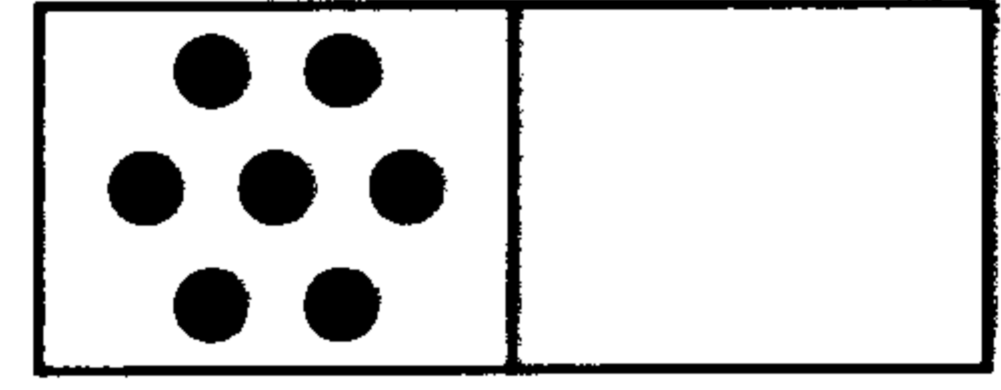
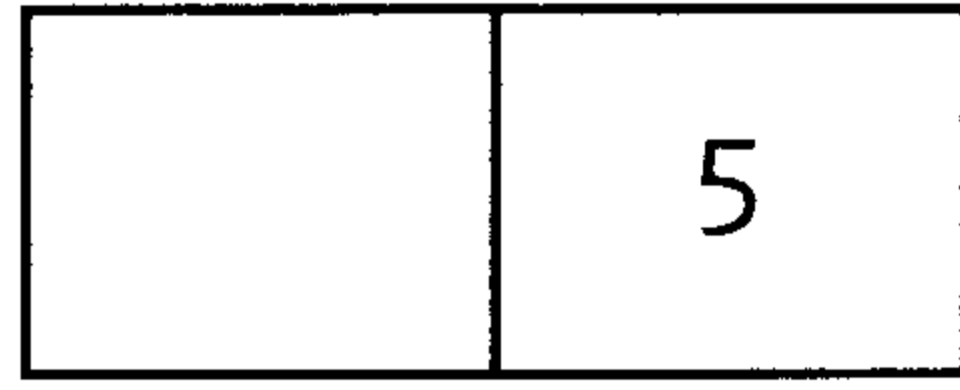
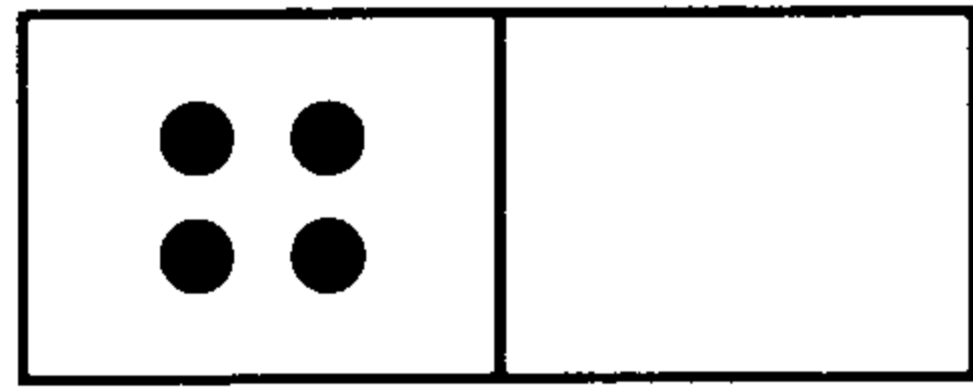
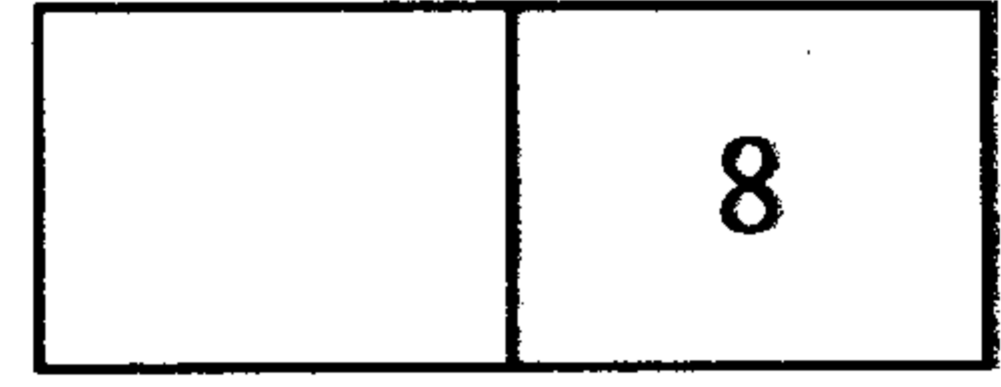
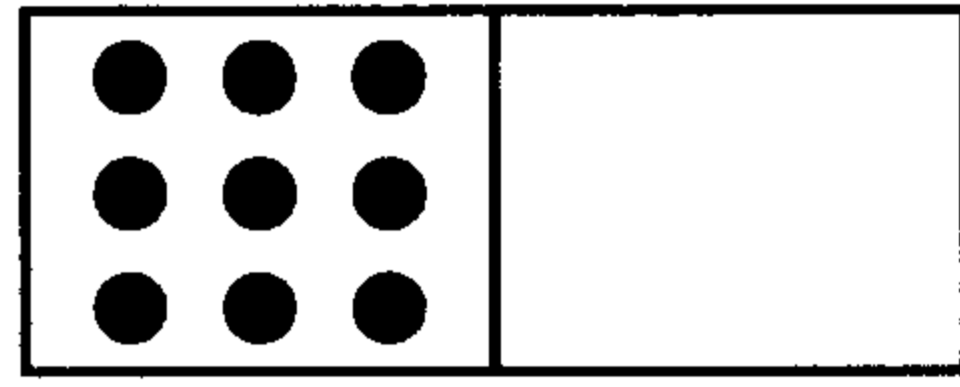
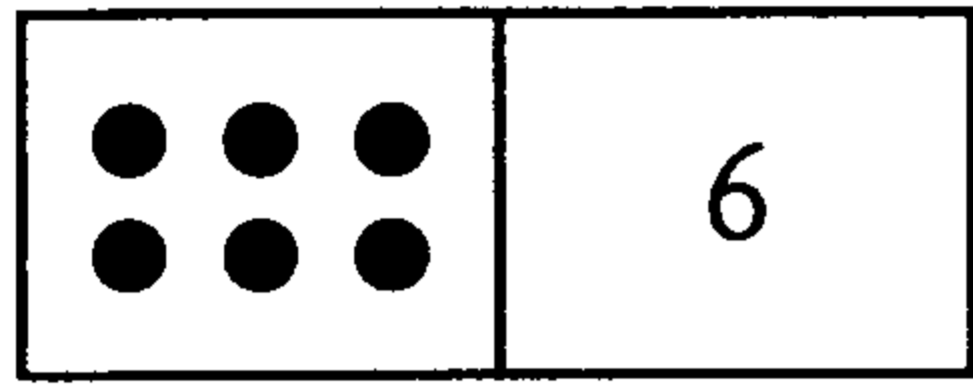


Sheet 9 Tens and units

A

Fill in the boxes.



B

$10 = 10 + \boxed{0}$

$25 = \boxed{} + 5$

$11 = 10 + \boxed{}$

$12 = \boxed{10} + 2$

$14 = 10 + \boxed{}$

$15 = \boxed{} + 5$

$19 = 10 + \boxed{}$

$20 = \boxed{} + 0$

$21 = 20 + \boxed{}$

$17 = \boxed{} + 7$

$13 = 10 + \boxed{}$

$18 = \boxed{} + 8$

$22 = 20 + \boxed{}$

$16 = \boxed{} + 6$

$24 = 20 + \boxed{}$

C

$29 = \boxed{} + 9$

$68 = 60 + \boxed{}$

$97 = \boxed{} + \boxed{}$

$56 = 50 + \boxed{}$

$25 = \boxed{} + 5$

$49 = \boxed{} + \boxed{}$

$92 = \boxed{} + 2$

$81 = 80 + \boxed{}$

$73 = \boxed{} + \boxed{}$

$77 = 70 + \boxed{}$

$34 = \boxed{} + 4$

$65 = \boxed{} + \boxed{}$

$43 = \boxed{} + 3$

$50 = 50 + \boxed{}$

$32 = \boxed{} + \boxed{}$

$94 = 90 + \boxed{}$

$72 = \boxed{} + 2$

$58 = \boxed{} + \boxed{}$