


SWEET SHOP



You have £1.00. Can you work out how much change you would get if you bought each sweet?



gums 20p

$$\boxed{100} - \boxed{20} = \boxed{}$$




toffees 80p

$$\boxed{100} - \boxed{80} = \boxed{}$$



lolly 10p

$$\boxed{100} - \boxed{} = \boxed{}$$



toffee apple 60p

$$\boxed{100} - \boxed{} = \boxed{}$$



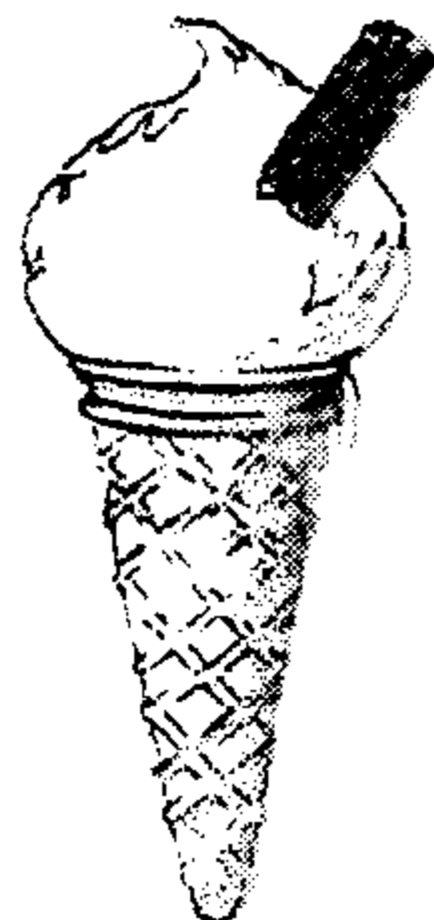
crisps 30p

$$\boxed{100} - \boxed{} = \boxed{}$$



rock 50p

$$\boxed{100} - \boxed{} = \boxed{}$$




ice cream 90p

$$\boxed{100} - \boxed{} = \boxed{}$$



chocolate 70p

$$\boxed{100} - \boxed{} = \boxed{}$$



snack bar 40p

$$\boxed{100} - \boxed{} = \boxed{}$$