

Can you count on and back in ones to find the number?

324 Count on 2 is

785 Count back 3 is

235 Count on 5 is

324 Count back 4 is

658 Count on 4 is

500 Count back 2 is

700 Count on 3 is

405 Count back 5 is

197 Count on 5 is


701 Count back 3 is

998 Count on 4 is

1004 Count back 5 is


Count **on** from 270 to 275

How many did you count?




Count **on** from 684 to 687

How many did you count?




Count **on** from 528 to 532

How many did you count?




Count **on** from 397 to 401

How many did you count?




Count **back** from 829 to 824

How many did you count?




Count **back** from 640 to 638

How many did you count?



Count **back** from 253 to 249

How many did you count?



Count **back** from 702 to 699

How many did you count?

